



Nom:

Prénom:

- Donner un sens à une fraction.
- Utiliser des fractions plus grandes que l'unité.

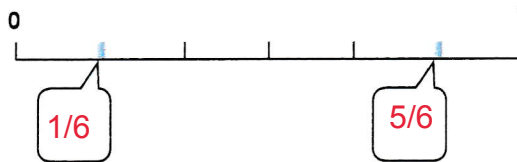
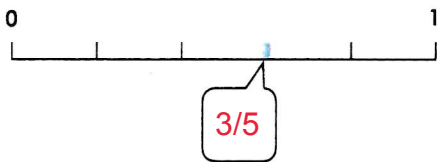
Fiche 5c

Numération


Exercices

Les fractions

1 Ecris la fraction qui correspond aux points sur la droite.




2 Ecris la fraction qui correspond à la partie coloriée.



$\frac{5}{4}$

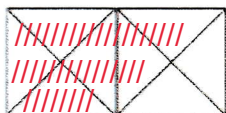


$\frac{9}{6}$

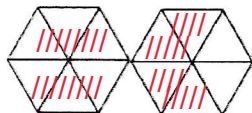


$\frac{5}{3}$

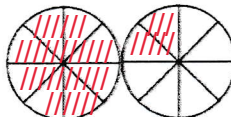
3 Colorie la partie qui correspond à la fraction.



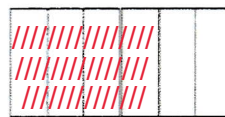
$\frac{6}{4}$



$1 + \frac{4}{6}$



$\frac{10}{16}$



$1 + \frac{1}{3}$

4 Relie chaque fraction à la graduation correspondante.



$\frac{2}{5}$



$\frac{4}{5}$



$\frac{5}{5}$



$1 + \frac{2}{5}$



$\frac{9}{5}$



5 Ecris la fraction qui correspond aux points sur la droite selon l'exemple.

